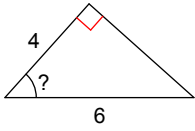


**Missing Info.**

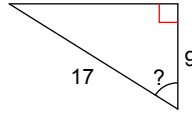
© 2011 Kuta Software LLC. All rights reserved.

**Find the measure of the indicated angle to the nearest degree. Show your work.**

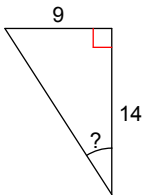
1)



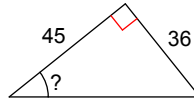
2)



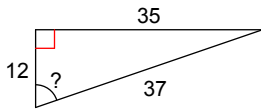
3)



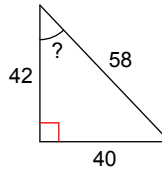
4)

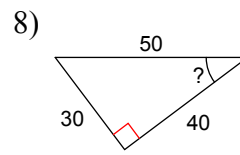
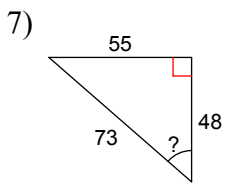


5)

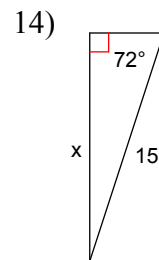
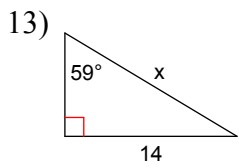
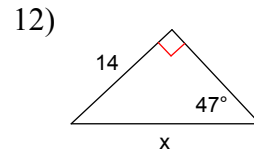
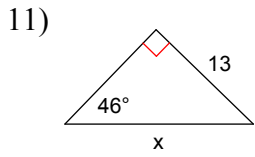
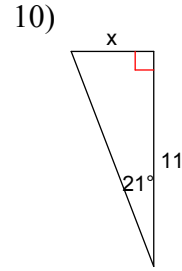
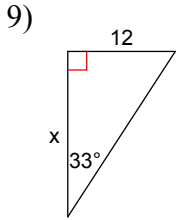


6)





**Find the missing side. Round to the nearest tenth. Show your work.**



## Answers to Missing Info.

1)  $48^\circ$

5)  $71^\circ$

9) 18.5

13) 16.3

2)  $58^\circ$

6)  $44^\circ$

10) 4.2

14) 14.3

3)  $33^\circ$

7)  $49^\circ$

11) 18.1

4)  $39^\circ$

8)  $37^\circ$

12) 19.1