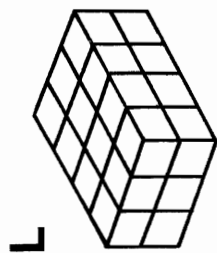


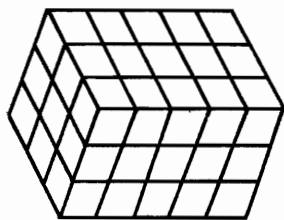
What Problem Does A Five-Foot Man Have?

TO ANSWER THIS QUESTION:

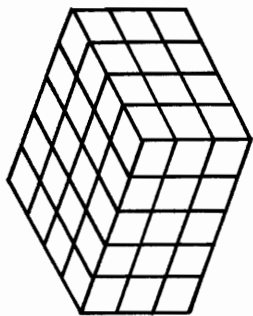
Figure out the volume of any rectangular solid below and find your answer in the code. Each time it appears in the code, write the letter of that exercise above it. Keep working and you will discover the answer to the question.



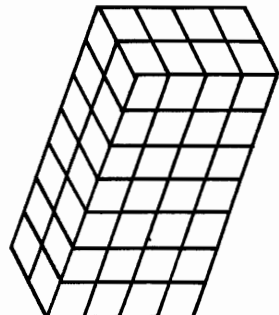
L



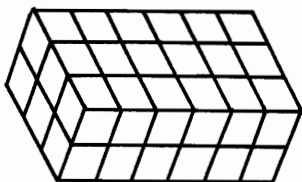
G



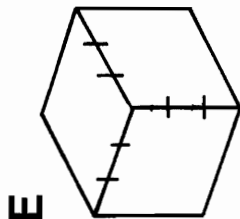
N



R

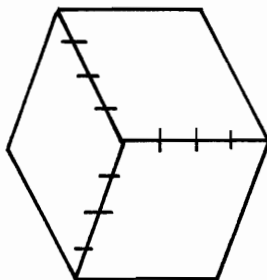


D



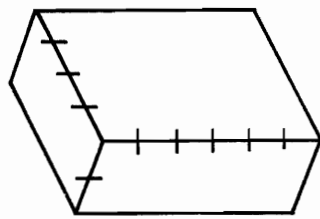
E

(I) LENGTH: 9
WIDTH: 7
HEIGHT: 10



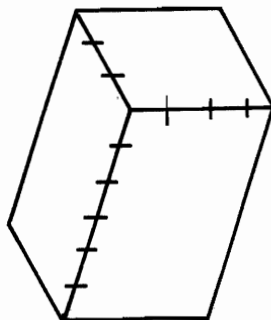
O

(B) LENGTH: 15
WIDTH: 4
HEIGHT: 8



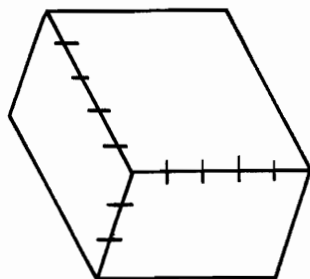
U

(Y) LENGTH: 12
WIDTH: 12
HEIGHT: 5



W

(H) LENGTH: 16
WIDTH: 11
HEIGHT: 15



F

(T) LENGTH: 18
WIDTH: 6
HEIGHT: 25

(P) LENGTH: 30
WIDTH: 20
HEIGHT: $\frac{1}{2}$

(S) LENGTH: 17
WIDTH: $\frac{1}{2}$
HEIGHT: 40

CODED
ANSWER

480 48 720 630 60 45 2700 72 64 336 60 36 336 2640 336 24 75
300 336 630 56 340 64 75 340 2640 64 27 340