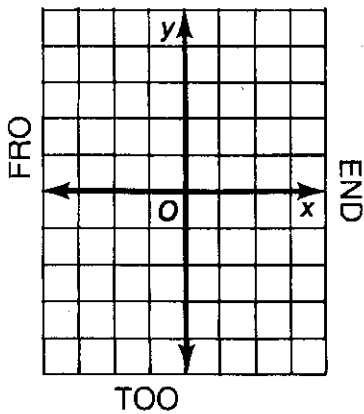


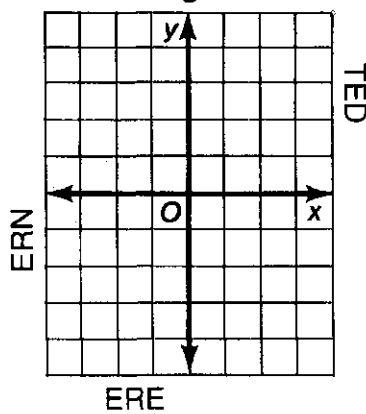
What Did the Toothless Old Termite Say When He Entered a Tavern ?

Graph each pair of inequalities below and indicate the solution set of the system with crosshatching or shading. The crosshatching or shading, if extended, would cover a set of three letters. Print these letters in the three boxes at the bottom of the page that contain the exercise number.

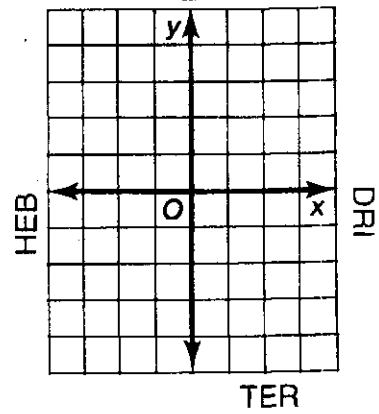
① $y \leq x - 1$
 $y \geq -3$



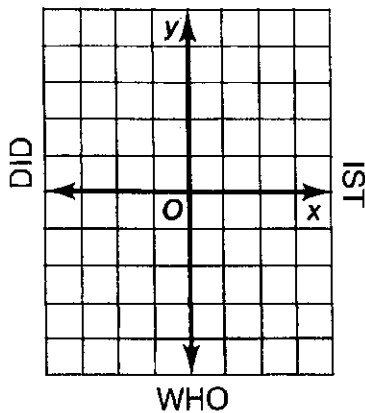
② $x \leq 2$
 $y \leq \frac{2}{3}x - 1$



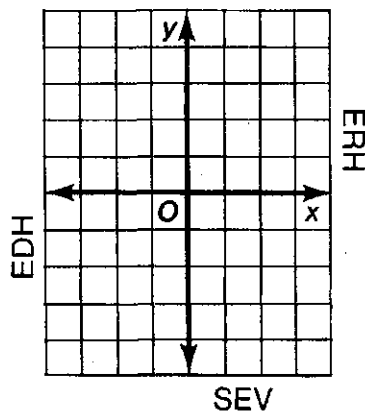
③ $y < -x + 1$
 $y > \frac{1}{2}x - 2$



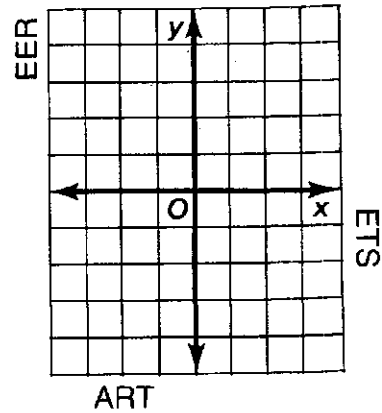
④ $y < x$
 $3x + 2y > 4$



⑤ $x - 3y \leq 12$
 $x > 2$



⑥ $y \leq 1$
 $2x + y < 1$



4	4	4	3	3	3	6	6	6	1	1	1	5	5	5	2	2	2
---	---	---	---	---	---	---	---	---	---	---	---	---	---	---	---	---	---